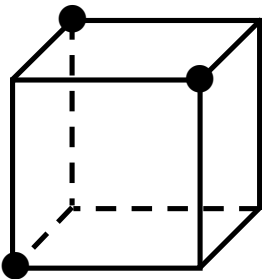


立体切断練習プリント

図の3点を通る平面で立方体を切断し、切断面の名称を答えましょう。

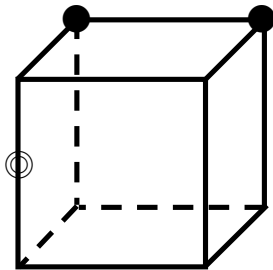
●→立方体の頂点 ⊙→辺の中点 ⊙→辺を3等分したうちの1点

(1)[



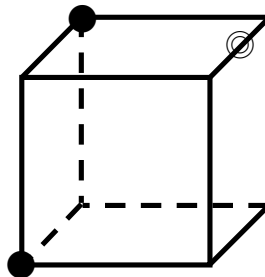
]

(2)[



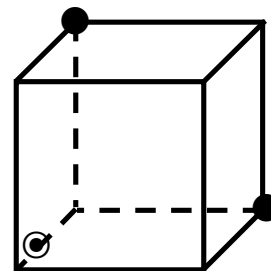
]

(3)[



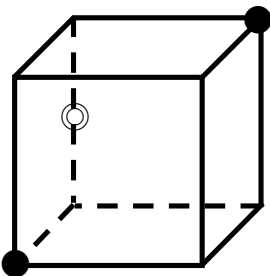
]

(4)[



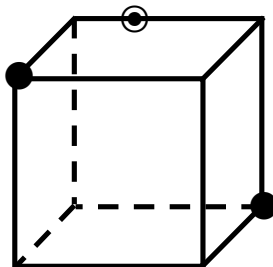
]

(5)[



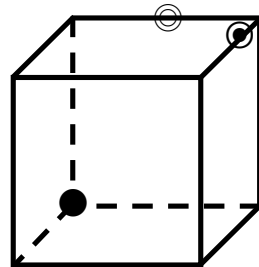
]

(6)[



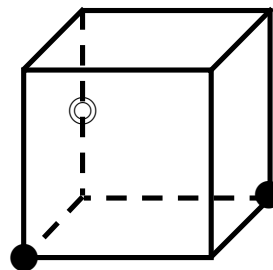
]

(7)[



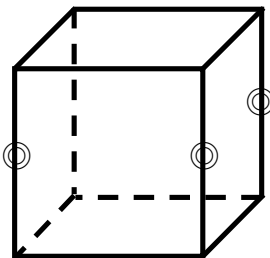
]

(8)[



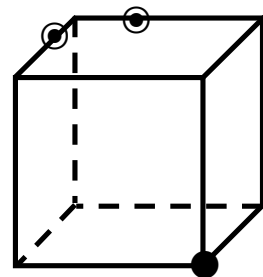
]

(9)[



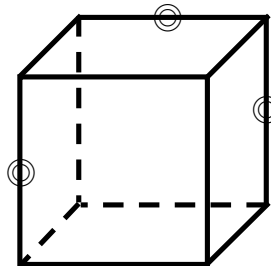
]

(10)[



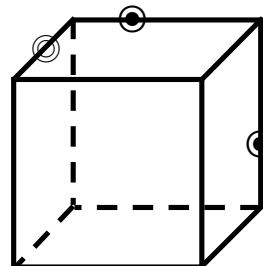
]

(11)[



]

(12)[



]